

Löse die folgenden Aufgaben in 10 Minuten!

$$\begin{array}{lll}
 1 \cdot 7 = \underline{\quad} & 3 \cdot \underline{\quad} = 42 & \underline{\quad} : 12 = 1 \\
 1 \cdot 14 = \underline{\quad} & 10 \cdot \underline{\quad} = 50 & \underline{\quad} : 5 = 7 \\
 90 : 10 = \underline{\quad} & 90 : \underline{\quad} = 9 & \underline{\quad} : 13 = 9 \\
 9 : 3 = \underline{\quad} & 120 : \underline{\quad} = 6 & \underline{\quad} \cdot 6 = 54 \\
 8 \cdot 10 = \underline{\quad} & 11 : \underline{\quad} = 1 & \underline{\quad} : 5 = 2
 \end{array}$$



$$\begin{array}{lll}
 1 \cdot \underline{\quad} = 2 & \underline{\quad} : 3 = 5 & 10 : \underline{\quad} = 5 \\
 10 \cdot \underline{\quad} = 170 & 5 \cdot \underline{\quad} = 30 & \underline{\quad} \cdot 6 = 36 \\
 6 \cdot \underline{\quad} = 72 & \underline{\quad} \cdot 14 = 112 & \underline{\quad} \cdot 7 = 21 \\
 7 \cdot \underline{\quad} = 112 & \underline{\quad} : 17 = 1 & 1 \cdot 8 = \underline{\quad} \\
 3 \cdot \underline{\quad} = 48 & 40 : \underline{\quad} = 10 & 6 \cdot \underline{\quad} = 102
 \end{array}$$

Löse auch diese Aufgaben, nimm den Rechenweg den du am besten kannst!



	360
	20
30	
120	350

	330
500	40
	360
	370
460	

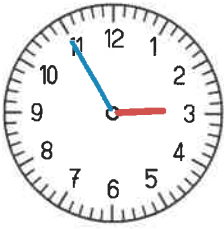
10	20	0	10	20	30

		380			
				100	
		50	50		
		20		20	
10					20

Uhrzeiten 1

Name: _____

1 Bestimme die Uhrzeiten. Schreibe morgens, mittags, abends oder nachts daneben.



_____ Uhr

_____ Uhr



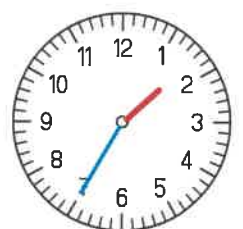
_____ Uhr

_____ Uhr



_____ Uhr

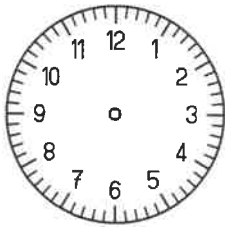
_____ Uhr



_____ Uhr


_____ Uhr

2 Zeichne die Zeiger und die andere Uhrzeit ein. Achte auf die Stellung der Zeiger.



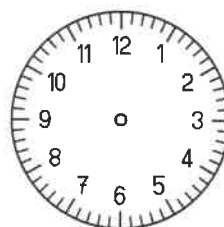
_____ Uhr

15:35 Uhr



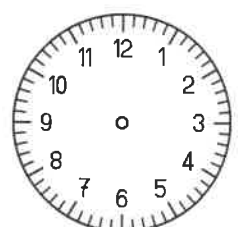
9:55 Uhr

_____ Uhr



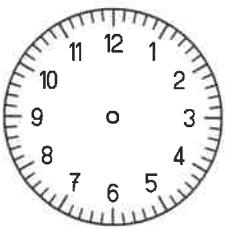
3:20 Uhr

_____ Uhr



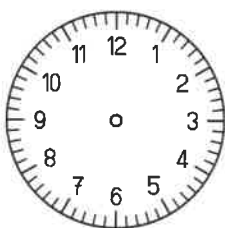
8:10 Uhr

_____ Uhr



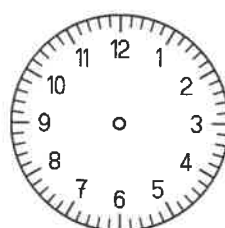
1:45 Uhr

_____ Uhr



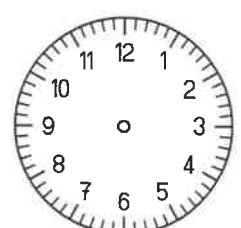
5:15 Uhr

_____ Uhr



_____ Uhr

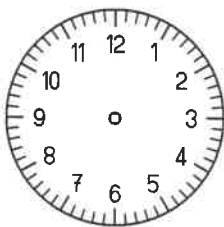
0:50 Uhr



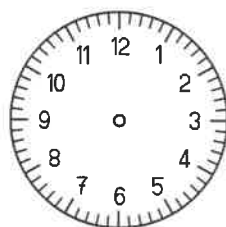
5:25 Uhr

_____ Uhr

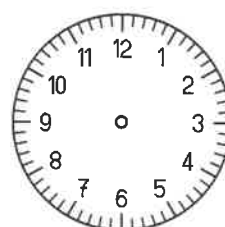
3 Trage die Zeiger und die richtige Tageszeit ein.



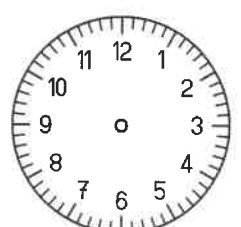
1:45 Uhr



17:55 Uhr



10:10 Uhr



17:15 Uhr

Name:

Datum:

Klasse:

HA - 1 -

6	•	1	5	=		
	•			=		
	•			=		

2	•	1	9	=		
	•			=		
	•			=		

4	•	1	9	=		
	•			=		
	•			=		

8	•	1	7	=		
	•			=		
	•			=		

4	•	1	1	=		
	•			=		
	•			=		

8	•	1	7	=		
	•			=		
	•			=		

5	•	1	5	=		
	•			=		
	•			=		

8	•	1	7	=		
	•			=		
	•			=		

6	•	1	6	=		
	•			=		
	•			=		

3	•	1	4	=		
	•			=		
	•			=		

Name:

Datum:

Klasse:

HA - 2 -

6	•	4	3	=			
	•			=			
	•			=			

8	•	3	5	=			
	•			=			
	•			=			

7	•	2	9	=			
	•			=			
	•			=			

3	•	7	4	=			
	•			=			
	•			=			

9	•	3	1	=			
	•			=			
	•			=			

4	•	6	6	=			
	•			=			
	•			=			

2	•	7	8	=			
	•			=			
	•			=			

7	•	1	9	=			
	•			=			
	•			=			

5	•	3	7	=			
	•			=			
	•			=			

4	•	4	5	=			
	•			=			
	•			=			

Name:

Datum:

Klasse:

HA - 3 -

3	•	7	4	=		
	•			=		
	•			=		

7	•	8	8	=		
	•			=		
	•			=		

4	•	1	9	=		
	•			=		
	•			=		

8	•	6	2	=		
	•			=		
	•			=		

6	•	2	4	=		
	•			=		
	•			=		

4	•	9	3	=		
	•			=		
	•			=		

5	•	2	9	=		
	•			=		
	•			=		

9	•	3	6	=		
	•			=		
	•			=		

4	•	2	8	=		
	•			=		
	•			=		

3	•	2	7	=		
	•			=		
	•			=		

Name:

Datum:

Klasse:

HA - 4 -

8	•	2	5	=			
	•			=			
	•			=			

5	•	4	5	=			
	•			=			
	•			=			

6	•	3	6	=			
	•			=			
	•			=			

8	•	2	5	=			
	•			=			
	•			=			

7	•	1	2	=			
	•			=			
	•			=			

9	•	2	1	=			
	•			=			
	•			=			

4	•	8	5	=			
	•			=			
	•			=			

7	•	2	0	=			
	•			=			
	•			=			

4	•	1	5	=			
	•			=			
	•			=			

0	•	9	9	=			
	•			=			
	•			=			

Name: _____

Datum: _____

Klasse: _____



Schriftlich subtrahieren

1

		2	2	8
	-	1	8	1
<hr/>				

		6	1	4
	-	4	6	3
<hr/>				

		1	2	9
	-		6	1
<hr/>				

		6	1	4
	-		3	3
<hr/>				

2

		4	6	9
	-	2	8	1
<hr/>				

		5	8	4
	-	3	1	6
<hr/>				

		7	4	8
	-	5	5	2
<hr/>				

		8	6	8
	-	1	0	9
<hr/>				

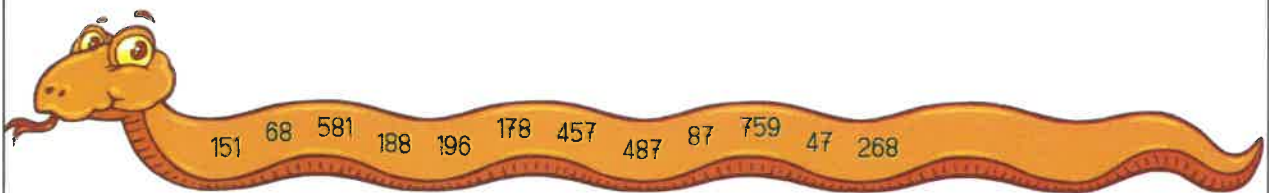
3

		8	2	4
	-	6	4	6
<hr/>				

		3	4	1
	-	2	5	4
<hr/>				

		5	3	8
	-		8	1
<hr/>				

		5	2	4
	-		3	7
<hr/>				



Ich konnte die Aufgaben:



4


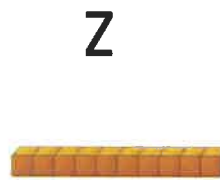

Nehme dir nun das Blatt, das zu deinem Smiley passt!



Ich muss noch bisschen üben, aber das ist nicht schlimm!

Nutze die Schülertafeln zur Hilfe!

	H	Z	E	
	4	1	8	
	-	1	7	5

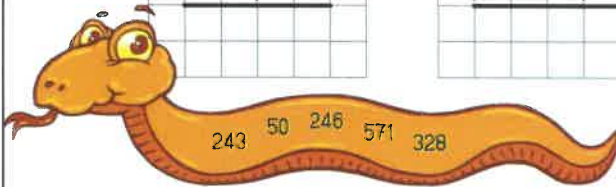


		H	Z	E	
		6	1	9	
		-	4	8	

		H	Z	E	
		2	7	5	
		-	2	9	

		H	Z	E	
		6	4	7	
		-	3	1	9

		H	Z	E	
		1	1	7	
		-	6	7	



1

		H	Z	E	
		8	1	3	
		-	4	7	5

		H	Z	E	
		6	1	5	
		-	1	8	8

		H	Z	E	
		6	3	1	
		-	2	3	8

		H	Z	E	
		4	4	0	
		-	2	8	7

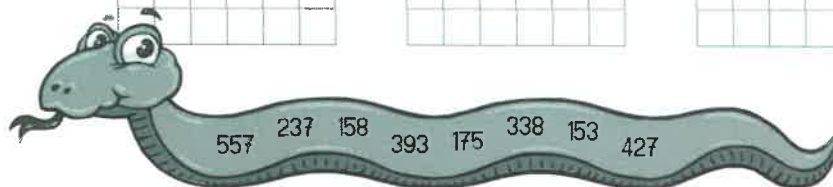
2

		H	Z	E	
		4	0	6	
		-	2	3	1

		H	Z	E	
		6	1	0	
		-	5	3	

		H	Z	E	
		4	0	5	
		-	2	4	7

		H	Z	E	
		5	0	1	
		-	2	6	4



3 Wenn du fertig bist nehme dir das AB :





Jetzt wird es etwas schwerer. Rechne immer schriftlich!

$561 - 368 = \square$

	5	6	1
-	3	6	8

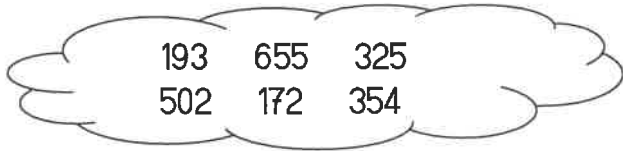
$701 - 199 = \square$

$503 - 178 = \square$

$670 - 498 = \square$

$800 - 446 = \square$

$1000 - 345 = \square$



Jetzt wird es etwas schwerer. Rechne immer schriftlich!

$561 - 368 = \square$

	5	6	1
-	3	6	8

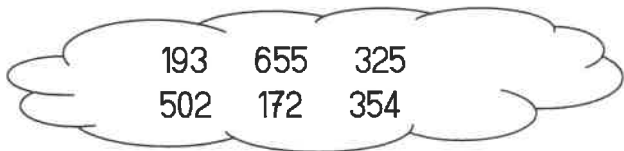
$701 - 199 = \square$


$503 - 178 = \square$

$670 - 498 = \square$

$800 - 446 = \square$

$1000 - 345 = \square$





Schriftliches Addieren macht Spaß



1

	7	7	7	
+	1	0	0	
<hr/>				

		3	1	
+	1	7	7	
<hr/>				

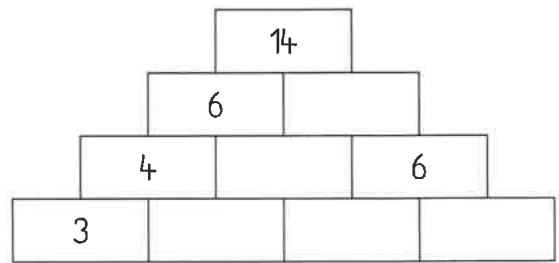
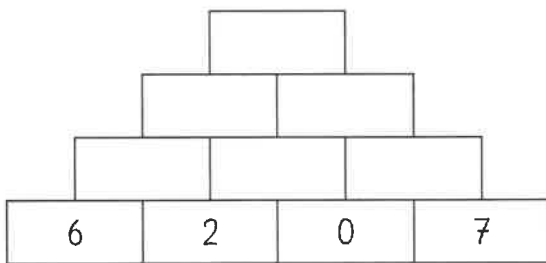
	1	4	7	
+	5	7	5	
<hr/>				

	4	4	0	
+	4	6	8	
<hr/>				

	4	4	6	
+	3	5	8	
<hr/>				

	5	8	5	
+	2	1	5	
<hr/>				

2 Kannst du auch noch im Kopf addieren?



3



	5	8	9	
+	1	3	4	
+		4	5	
<hr/>				

	1	3	6	
+	3	2	6	
+	1	6	9	
<hr/>				

	2	3	4	
+	2	5	1	
+	1	0	4	
<hr/>				

4



403 + 134 = _____

235 + 218 = _____

752 + 142 = _____

388 + 317 = _____

469 + 309 = _____

68 + 899 = _____